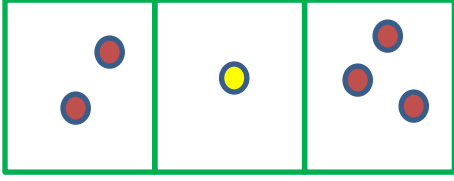


Adı : .....  
Soyadı: .....


1 . Sınıf  
Matematik

Toplama İşlemi  
Verilmeyeni Bulma-1

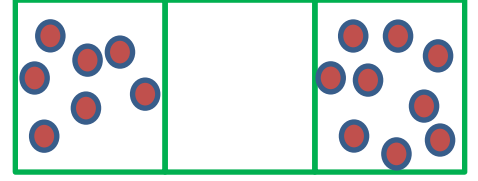
Verilmeyen toplananı bulunuz.




$$2 + \dots = 3$$




$$3 + \dots = 5$$




$$7 + \dots = 10$$




$$2 + \dots = 5$$




$$4 + \dots = 11$$



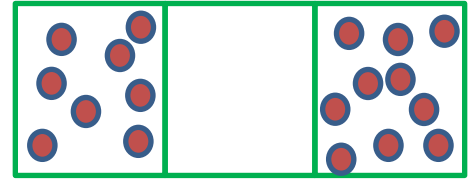
$$6 + \dots = 13$$




$$5 + \dots = 8$$



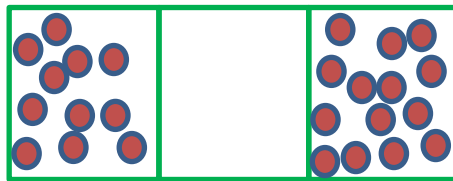
$$3 + \dots = 6$$




$$8 + \dots = 10$$



$$4 + \dots = 5$$



$$11 + \dots = 14$$



$$5 + \dots = 10$$

Adı : .....  
Soyadı: .....

1 . Sınıf  
Matematik

Toplama İşlemi  
Verilmeyeni Bulma-1

Verilmeyen toplananı bulunuz.

1

$$\begin{array}{r} + \\ \hline 2 \end{array}$$

2

$$\begin{array}{r} + \\ \hline 4 \end{array}$$

4

$$\begin{array}{r} + \\ \hline 5 \end{array}$$

3

$$\begin{array}{r} + \\ \hline 6 \end{array}$$

2

$$\begin{array}{r} + \\ \hline 3 \end{array}$$

5

$$\begin{array}{r} + \\ \hline 7 \end{array}$$

7

$$\begin{array}{r} + \\ \hline 9 \end{array}$$

6

$$\begin{array}{r} + \\ \hline 8 \end{array}$$

3

$$\begin{array}{r} + \\ \hline 5 \end{array}$$

8

$$\begin{array}{r} + \\ \hline 10 \end{array}$$

9

$$\begin{array}{r} + \\ \hline 10 \end{array}$$

10

$$\begin{array}{r} + \\ \hline 13 \end{array}$$

6

$$\begin{array}{r} + \\ \hline 12 \end{array}$$

7

$$\begin{array}{r} + \\ \hline 10 \end{array}$$

5

$$\begin{array}{r} + \\ \hline 10 \end{array}$$

12

$$\begin{array}{r} + \\ \hline 15 \end{array}$$

18

$$\begin{array}{r} + \\ \hline 20 \end{array}$$

13

$$\begin{array}{r} + \\ \hline 16 \end{array}$$

11

$$\begin{array}{r} + \\ \hline 13 \end{array}$$

8

$$\begin{array}{r} + \\ \hline 15 \end{array}$$